

Name _____

Date _____ Period _____


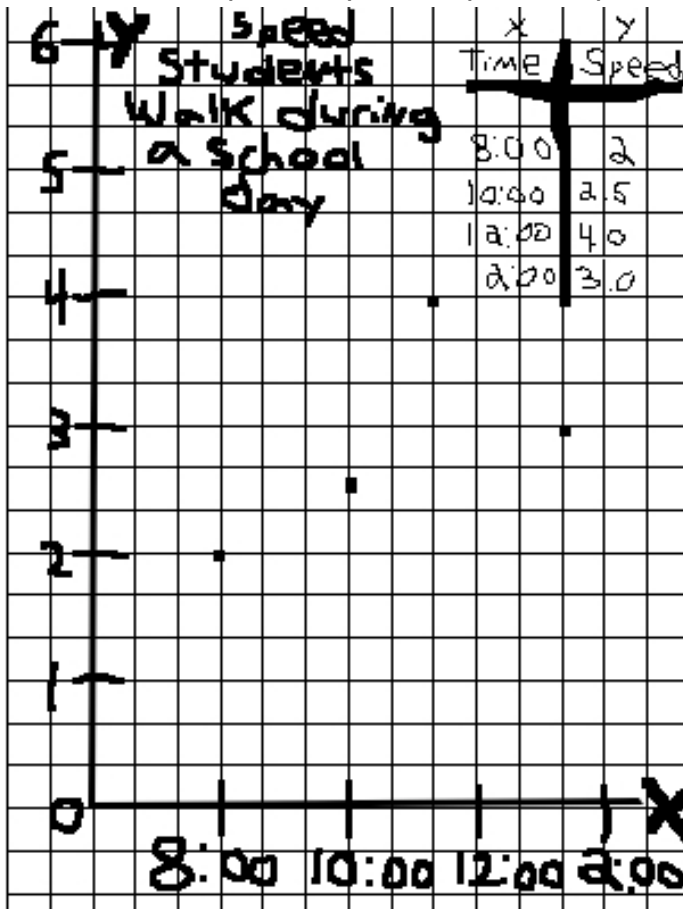
Graphing Practice: Point Graphs

Directions: Grade each graph and then make a “A” graph on the right.

Science Graph Grading


Requirements	Points Possible	Your score	Teacher's score
Title present	1		
Title describes what the graph is about	1		
Appropriate graph type made (bar, line etc.....)	1		
x-axis labeled with units (cm, mm, etc...)	1		
y-axis labeled with units (cm, mm, etc.)	1		
x-axis scale is labeled (numbers, names of groups)	1		
y-axis scale is labeled (numbers, etc.)	1		
Graph uses 80% or more of the paper	1		
Graph is neat and easy to read	1		
Graph is accurate and matches the data table	1		
Total	10		

A=9-10 pts B=8 pts C=7 pts D= 6 pts F=0-5 pts



1. What was wrong with the graph?


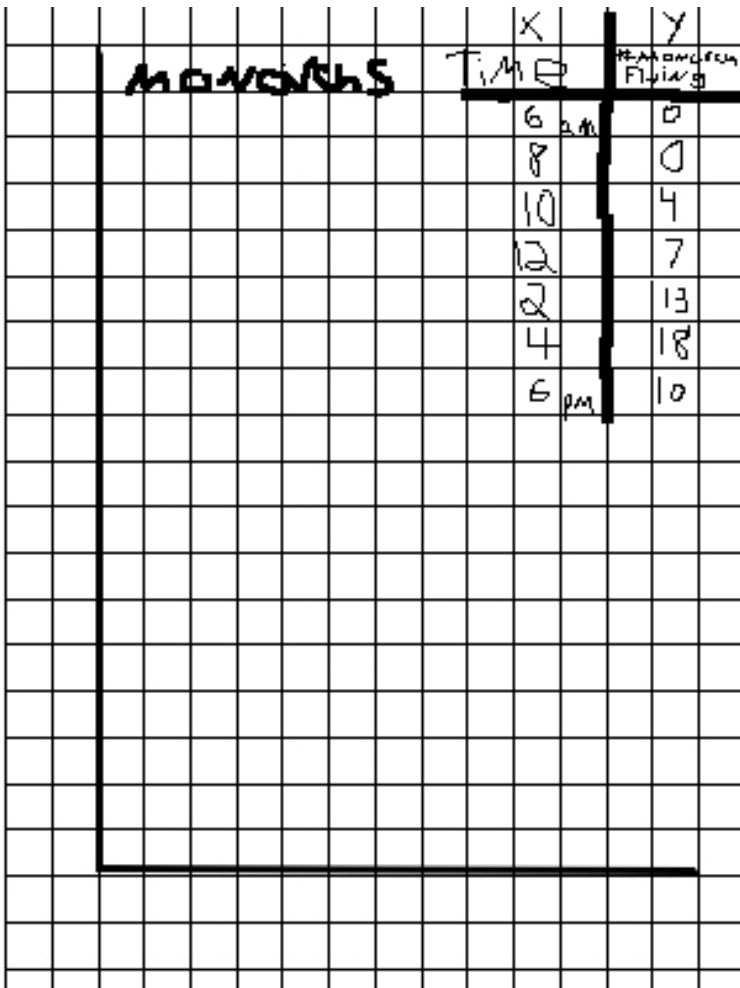
What grade would you give the graph? _____



Science Graph Grading

Requirements	Points Possible	Your score	Teacher's score
Title present	1		
Title describes what the graph is about	1		
Appropriate graph type made (bar, line etc.....)	1		
x-axis labeled with units (cm, mm, etc...)	1		
y-axis labeled with units (cm, mm, etc.)	1		
x-axis scale is labeled (numbers, names of groups)	1		
y-axis scale is labeled (numbers, etc.)	1		
Graph uses 80% or more of the paper	1		
Graph is neat and easy to read	1		
Graph is accurate and matches the data table	1		
Total	10		

A=9-10 pts B=8 pts C=7 pts D= 6 pts F=0-5 pts



2. What was wrong with the graph?


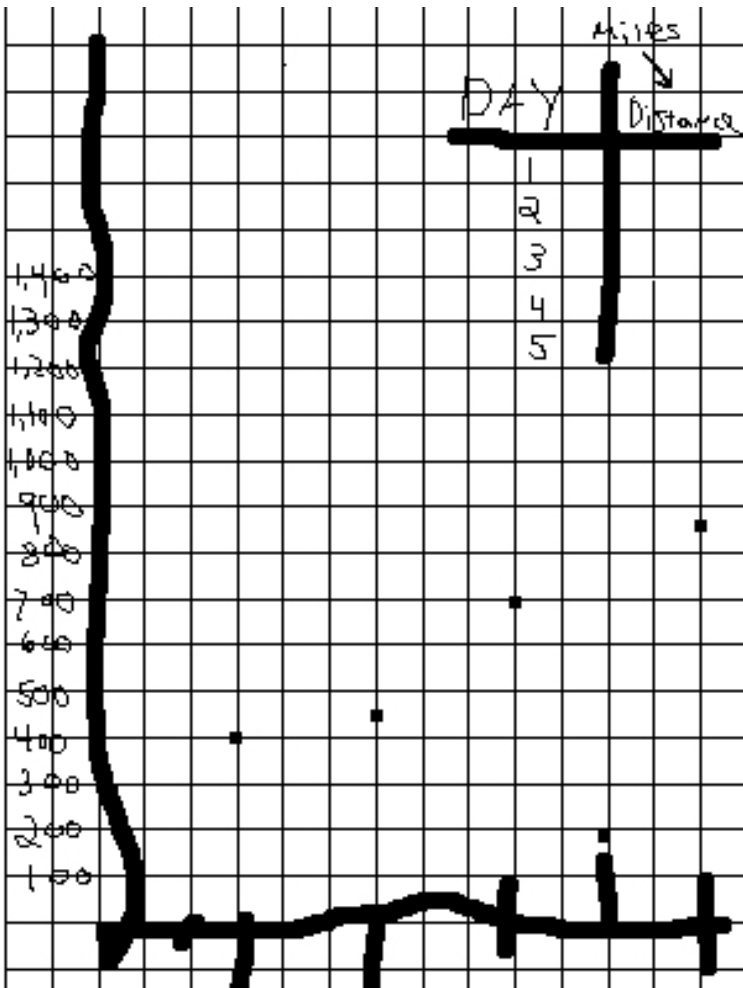
What grade would you give the graph? _____



Science Graph Grading

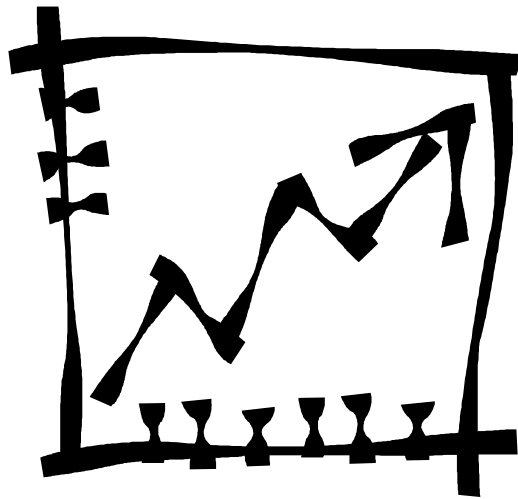
Requirements	Points Possible	Your score	Teacher's score
Title present	1		
Title describes what the graph is about	1		
Appropriate graph type made (bar, line etc.....)	1		
x-axis labeled with units (cm, mm, etc...)	1		
y-axis labeled with units (cm, mm, etc.)	1		
x-axis scale is labeled (numbers, names of groups)	1		
y-axis scale is labeled (numbers, etc.)	1		
Graph uses 80% or more of the paper	1		
Graph is neat and easy to read	1		
Graph is accurate and matches the data table	1		
Total	10		

A=9-10 pts B=8 pts C=7 pts D= 6 pts F=0-5 pts



3. What was wrong with the graph?



What grade would you give the graph? _____



Science Graph Grading

Requirements	Points Possible	Your score	Teacher's score
Title present	1		
Title describes what the graph is about	1		
Appropriate graph type made (bar, line etc.....)	1		
x-axis labeled with units (cm, mm, etc...)	1		
y-axis labeled with units (cm, mm, etc.)	1		
x-axis scale is labeled (numbers, names of groups)	1		
y-axis scale is labeled (numbers, etc.)	1		
Graph uses 80% or more of the paper	1		
Graph is neat and easy to read	1		
Graph is accurate and matches the data table	1		
Total	10		

A=9-10 pts B=8 pts C=7 pts D= 6 pts F=0-5 pts



4. What was wrong with the graph?

What grade would you give the graph? _____

